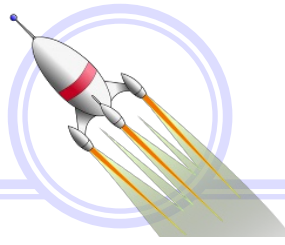


More Basic Subtraction on the Number Line
Math Worksheet 1

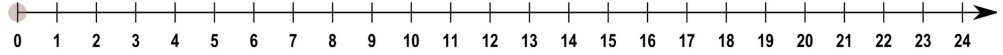


Name: _____

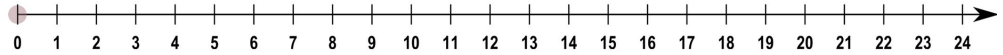
$12 - 2 =$ _____



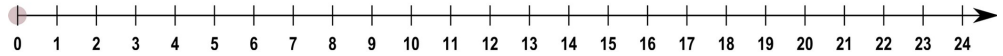
$21 - 10 =$ _____



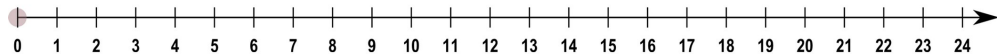
$18 - 11 =$ _____



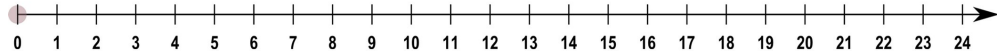
$14 - 12 =$ _____



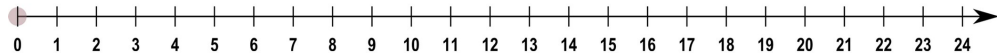
$16 - 4 =$ _____



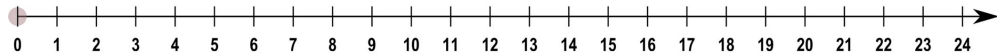
$20 - 8 =$ _____



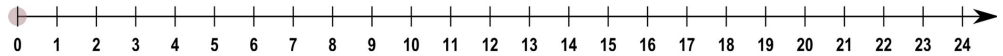
$16 - 8 =$ _____



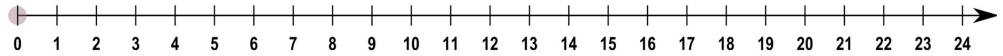
$19 - 16 =$ _____

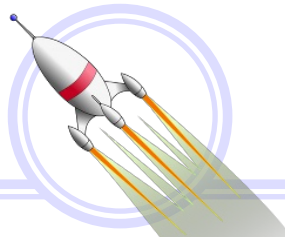


$17 - 5 =$ _____

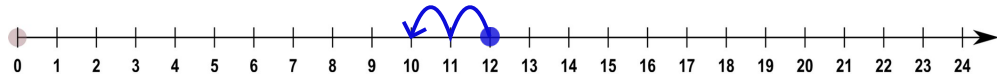


$13 - 4 =$ _____

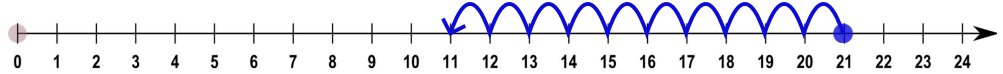




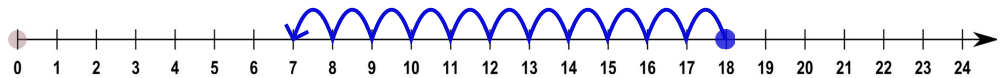
$12 - 2 = \underline{10}$



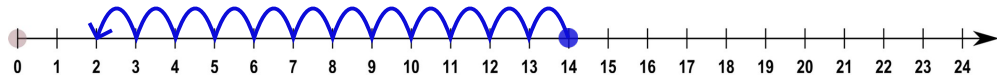
$21 - 10 = \underline{11}$



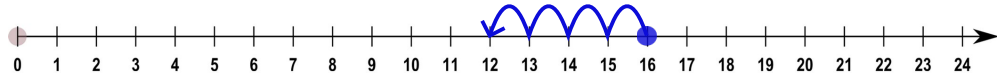
$18 - 11 = \underline{7}$



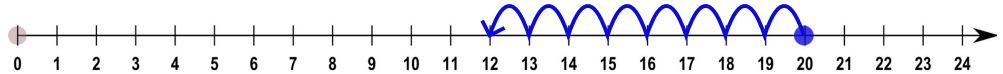
$14 - 12 = \underline{2}$



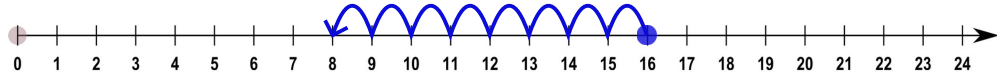
$16 - 4 = \underline{12}$



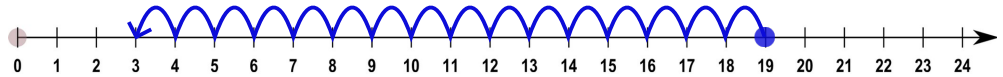
$20 - 8 = \underline{12}$



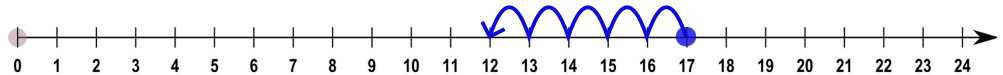
$16 - 8 = \underline{8}$



$19 - 16 = \underline{3}$



$17 - 5 = \underline{12}$



$13 - 4 = \underline{9}$

