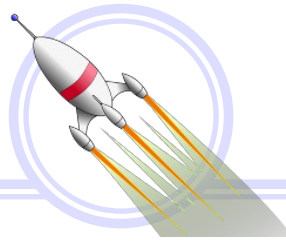


Basic Subtraction on the Number Line
Math Worksheet 1

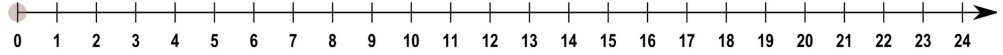


Name: _____

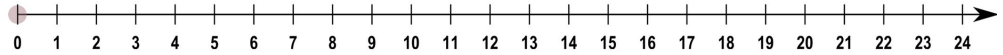
$6 - 5 =$ ___



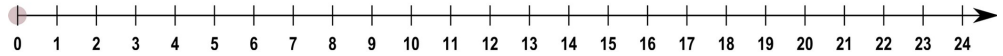
$9 - 8 =$ ___



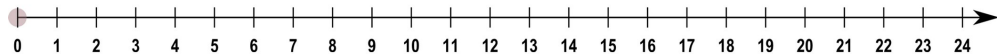
$3 - 1 =$ ___



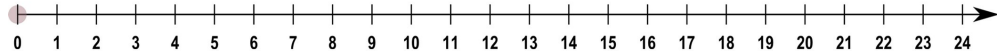
$5 - 4 =$ ___



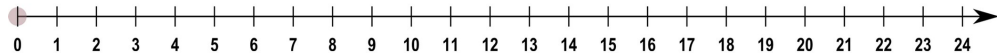
$7 - 4 =$ ___



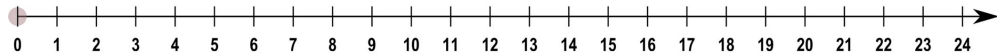
$7 - 2 =$ ___



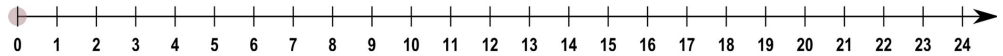
$7 - 5 =$ ___



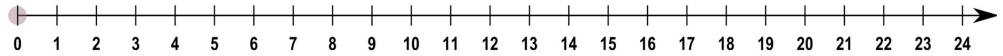
$3 - 3 =$ ___

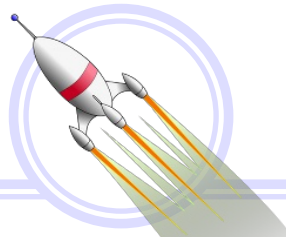


$7 - 6 =$ ___



$4 - 3 =$ ___





$6 - 5 = \underline{1}$



$9 - 8 = \underline{1}$



$3 - 1 = \underline{2}$



$5 - 4 = \underline{1}$



$7 - 4 = \underline{3}$



$7 - 2 = \underline{5}$



$7 - 5 = \underline{2}$



$3 - 3 = \underline{0}$



$7 - 6 = \underline{1}$



$4 - 3 = \underline{1}$

